

Thakur Educational Trust's (Regd.)
THAKUR VIDYA MANDIR HIGH SCHOOL & JUNIOR COLLEGE
I Terminal Examination 2015-16
Subject : Mathematics

NAME _____ Std: I DIV. _____

Roll NO.: _____

DATE - 28 / 09 / 2015

MARKS: 60

QI A] Write numerals :

(5)

1. forty - _____

2. Thirty three - _____

3. Nineteen - _____

4. Twenty nine - _____

5. Eleven - _____

B] Write in words :

(5)

a) 16 - _____

b) 48 - _____

c) 50 - _____

d) 13 - _____

e) 37 - _____

QII A] Fill in the boxes :

(5)

a) $2 \times 2 =$

b) $1 \times 7 =$






c) $2 \times 5 =$

d) $1 \times 8 =$

e) $2 \times 6 =$

B] Match the following :

(5)

	A	B
a)	4	
b)	3	
c)	2	
d)	1	
e)	5	


QIII A] Do as directed :

1) Tick (√) the 'big' object and cross (x) the 'small' object : (2)






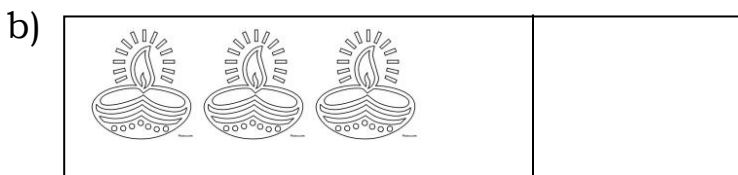
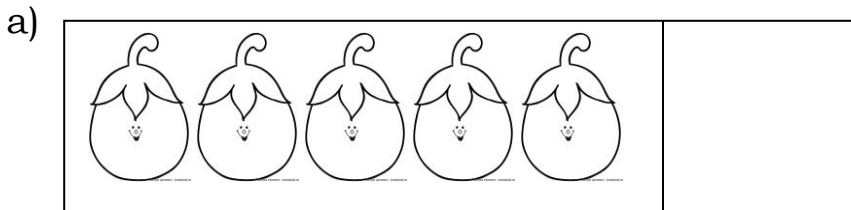
2) Tick (√) the one that is ' up ' and cross (x) the one that is 'down' : (2)





3) Tick (√) the boy ' near ' the house and cross (x) the boy 'far' from the house: (2)



4) Draw one line for every object in the picture : (2)

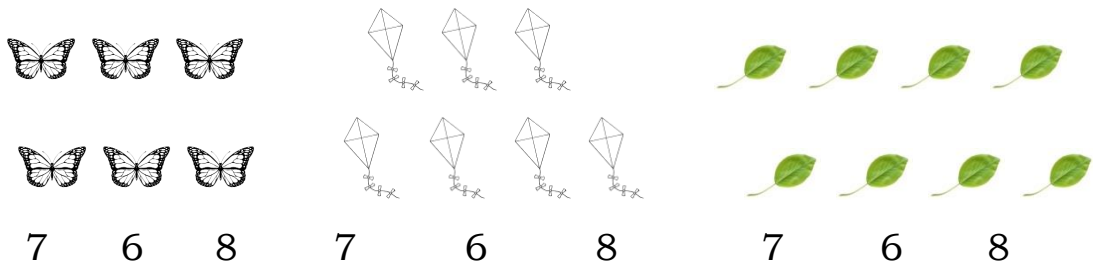


5) Join the similar shapes: (2)



B] 1) Count the objects and circle the correct number : (3)

--	--	--



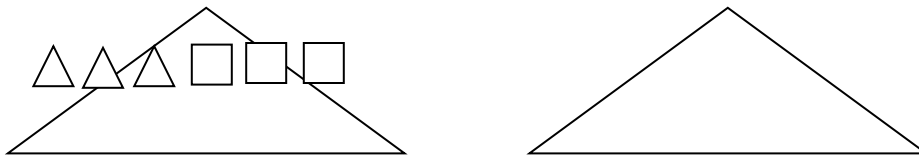
2) Write the numbers in reverse order : (3)

8							1
---	--	--	--	--	--	--	---

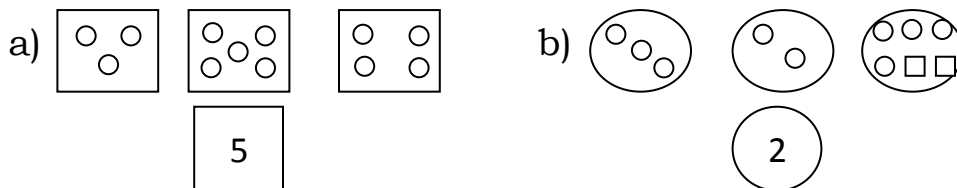
3) Draw more objects than the given ones: (1)



4) Draw less objects than the given ones: (1)




5) Join the number to the correct box : (2)



QIV Do as directed :

A] 1) Colour any four cups : (2)



2) Write the correct number in each box : (2)

a) $1 + 2 =$ b) $7 + 1 =$

3) Write the missing numbers : (2)

6			9
---	--	--	---

4) Write two numbers bigger than the given number : (2)

7

--	--

5) Write two numbers smaller than the given number : (2)

		9
--	--	---

B] 1) Write the given numbers in serial order : (5)

8, 5, 9, 6, 7

--	--	--	--	--

2) Add : (2)

a) $5 + 2 =$

b) $2 + 5 =$

3) Write the correct number in each box : (3)

Six cows on a farm

Three more joined them +

How many cows are there now?

All the best

Thakur Educational Trust's (Regd.)			
THAKUR VIDYA MANDIR HIGH SCHOOL & JUNIOR COLLEGE			
II Term Paper 2016-17			
Subject : English			
Name : _____	Std: I	Div : _____	Roll No. _____
DATE - 31.01.2017			Marks : 60 Time : 2.30 hrs

Q1A) Fill in the blanks by choosing the correct word from the bracket : 5

(chicks, plants, Raju, father, Grandma)

1) _____ has been busy today.

2) We can water the _____.

- 3) The little red hen called her _____.
- 4) Munnu and her _____ went to the flower shop.
- 5) _____ jumped up.

Q1B) Write the opposite for :

3

- 1) pretty x _____
- 2) buy x _____
- 3) friend x _____

Q1C) Write the rhyming word for :

3

- 1) pick = _____
- 2) duck = _____
- 3) come = _____

Q2 A) Find the smaller word in :

4

- 1) hand = _____
- 2) bear = _____
- 3) basket = _____
- 4) bread = _____

Q2 B) Complete the given words by filling up the missing letters :

3

- 1) i _ _ a g _ _
- 2) g _ _ r _ _ g e
- 3) h u n _ _ r e _ _

Q2 C) Circle the correct word :

4

- 1) Munnu went to the park with her **(mother/ father)**.
- 2) Get ready to start when it turns **(green/ yellow)**.
- 3) Raju was **(playing/ lying)** in his bed.
- 4) **(Obey/ Disobey)** the rules without much fuss.

Q3A) Complete the given sentences :

4

- 1) But her hand was _____
 - 2) Amit was drawing _____
 - 3) Grandma has cleaned _____
 - 4) A little red hen lived _____
-

Q3B) Make sentences :

2

1) black : _____
_____.

2) fun : _____
_____.

Q3 C) Who said to whom :

2

1) "Ninety five rupees in all".

2) "That's a good idea".

Q4) Answer the following questions :

10

1) Why was Priya crying ?

2) Where did Rohan and Sania go to pay the bill ?

3) Which animals are among the trees ?

4) Why did Rohan and Sania go to the garage ?

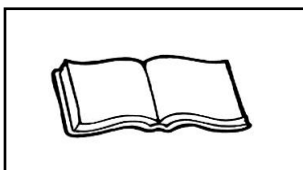
5) Why should we follow the traffic rules ?

GRAMMAR

Q1 Do as directed :

1) Write the missing vowels and complete the word :

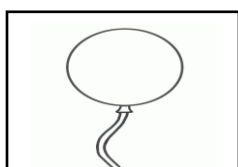
1



b _ _ k

2) Look at the picture below and write 'a' or 'an' in the box provided :

1





balloon

3) Circle the correct word :

1



[stars / star]

4) Choose the correct word from the bracket to form a correct gender pair :

1

Cock – _____ (horse/ hen)

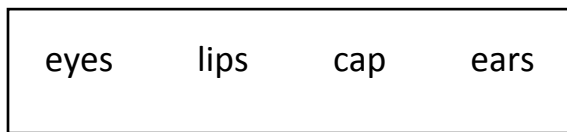
5) Fill in the blank with 'He', 'She' or 'It' :

1

Ram has a cat. _____ is sleeping on the mat.

6) Circle the odd man out in the following group :

1



7) Rewrite the sentence using capital letter and a full stop :

1

they are at home

8) Underline the doing word :

1

The sun rises in the east.


9) Fill in the blank using 'am', 'is' or 'are' :

1

It _____ a hot day today.

10) Look at the pictures given below and write the opposite for :

1

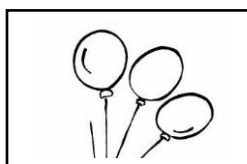


right X _____

11) Fill in the blank with 'These' or 'Those'

1

_____ are balloons.



12) Underline the describing word :

1

He has a long ruler.

13) Write the rhyming word for :

1

leg = _____ [mug/peg]

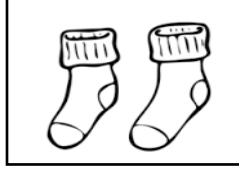
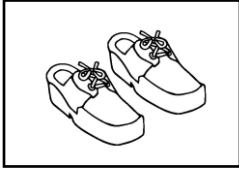
14) Find the smaller word :

1

shut = _____

15) Fill in the blanks with a conjunction :

1



shoes _____ socks

QII Write five sentences on any one topic : Teacher's Day or Festivals

5

1. _____

2. _____

3. _____

4. _____

5. _____

All the best